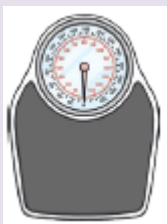
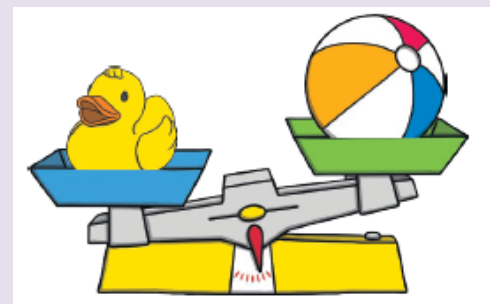
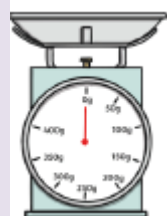




Weight and Mass

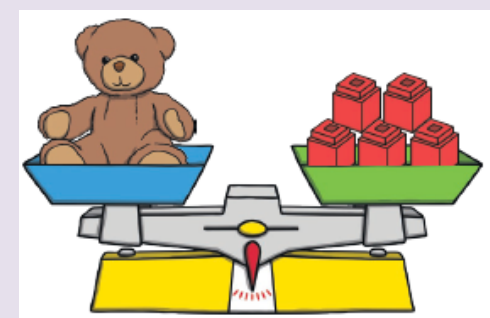


Types of **scales** to measure **mass**



The duck is **heavier** than the ball.
The ball is **lighter** than the duck.

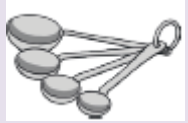
The teddy **weighs** the same as 5 cubes. They are **balanced**.



Capacity and Volume



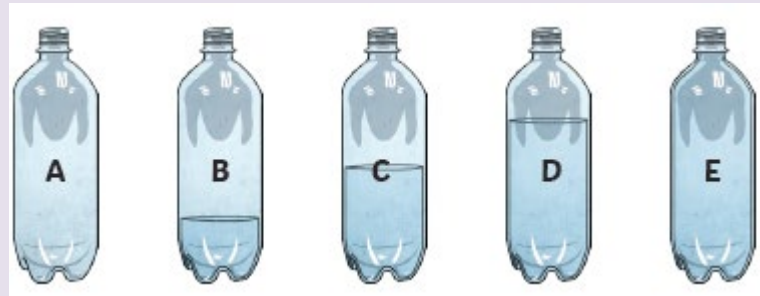
Different containers measure **volume**



empty

half full

full



holds the **most**



holds the **least**